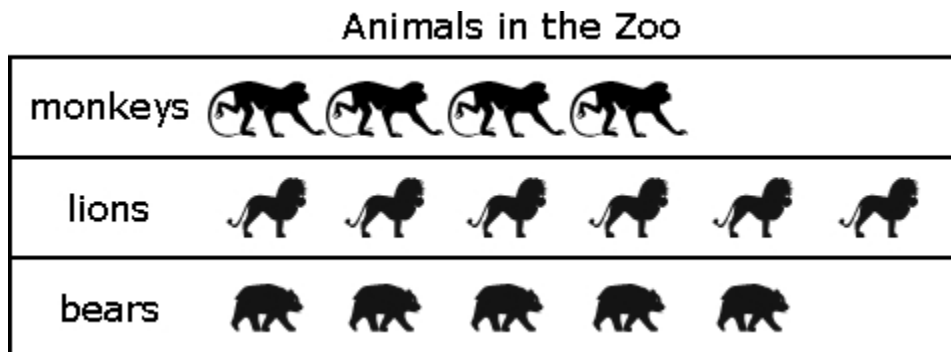


02 Math Test Graphing

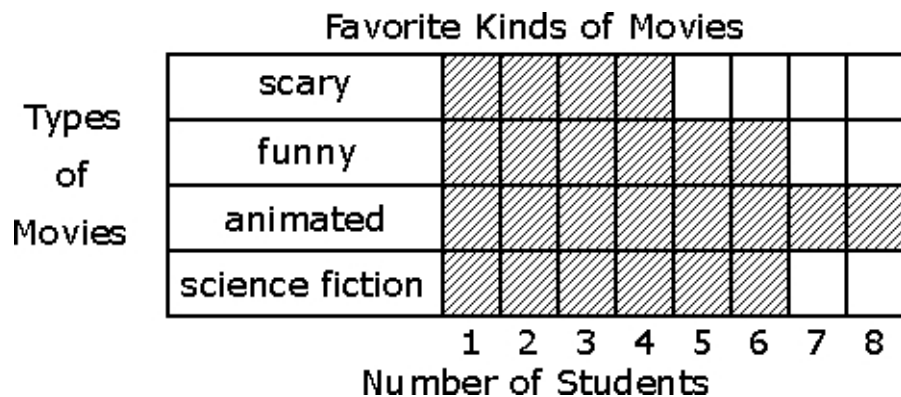
1) Which statement is true?



- A) There are more monkeys than bears.
 - B) There are more bears than any other animal.
 - C) There are more lions than bears.
 - D) There are an equal number of bears and monkeys.
-

02 Math Test Graphing

2) How many people like scary movies and funny movies altogether?











- A) 4
- B) 6
- C) 8
- D) 10

02 Math Test Graphing

3) Which is right?









Toy Animals


lion		 = 1 animal
bug		 = 1 animal
dog		 = 1 animal
cat		 = 1 animal

- A) There are an equal number of cats and bugs.
 - B) There are an equal number of dogs and lions.
 - C) There are an equal number of cats and dogs.
 - D) There are an equal number of lions and bugs.
-

4) Which is true?

Students' Favorite Fruit

apples 	
oranges 	
grapes 	
bananas 	




 = 1 student

- A) An equal number of students picked apples and bananas as their favorite fruit.
- B) An equal number of students picked grapes and oranges as their favorite fruit.
- C) An equal number of students picked grapes and bananas as their favorite fruit.
- D) An equal number of students picked oranges and apples as their favorite fruit.

02 Math Test Graphing

5) Which statement is NOT true?

Favorite Shapes

triangle	
circle	
square	

- A) There are more triangles than circles.
- B) There are more circles than squares.
- C) There are fewer triangles than squares.
- D) There are more squares than triangles.