

Notes 10.1 Angles

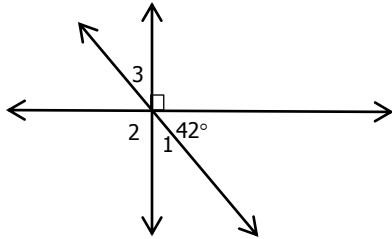
1) The hour hand of a clock moves from 2 to 4. Through how many degrees has the hour hand moved?

2) The measure of an angle is 25° greater than the measure of its supplement. Find the measure of both angles.

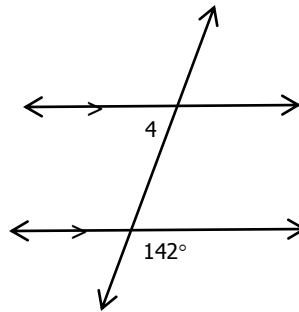
3) The measure of an angle is 4 times greater than its complement. Find the measure of both angles.

4-6 find the measure of the numbered angles.

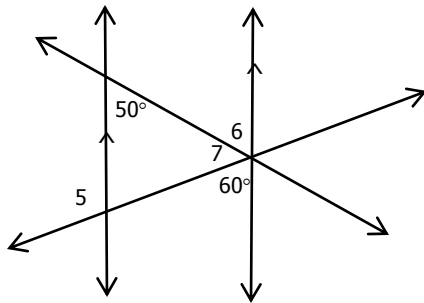
4)



5)

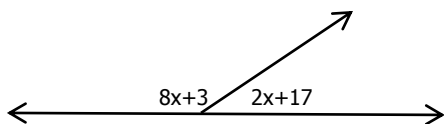


6)



7-8 Find the value of x .

7)



8)

